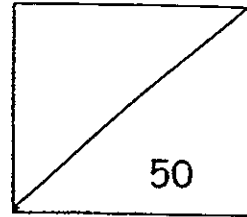




Pei Hwa Presbyterian Primary School
Mathematics Department
Primary One
Review Test (2013)



Name: _____ () Date : _____


Class : Integrity () Parent's Signature : _____

Section A (20 questions x 2 marks)

Answer all the questions by filling in the blanks or boxes provided and show all workings.

- 1) Count the number of bananas in the box below.

Write the number of bananas in numeral and in words.



In numeral:

In words:

- 2) and 9 make 79.

- 3) Cross out (X) the box with the **greatest** answer.

8 tens	$39 + 39$	81 ones	$90 - 39$
--------	-----------	---------	-----------

- 4) Study the number pattern below carefully. What is the missing number in the box?

53, 43, ?, 23, 13

- 5) 42 is 2 more than ?.

- 6) Colour the two numbers that add up to 73.


55	38	45	27	35
----	----	----	----	----

- 7) Arrange the numbers from the smallest to the greatest.

87	56	78	65
----	----	----	----

smallest

8) Count the bulbs in tens and ones and fill in the missing numbers.



tens ones =
(numeral)

9)

$$\begin{array}{r} 68 \\ + 29 \\ \hline \\ \hline \end{array}$$

10)

$$\begin{array}{r} 80 \\ - 36 \\ \hline \\ \hline \end{array}$$

11) There are 3 numbers on the cards.

Use any two cards to form the **greatest 2-digit number**.

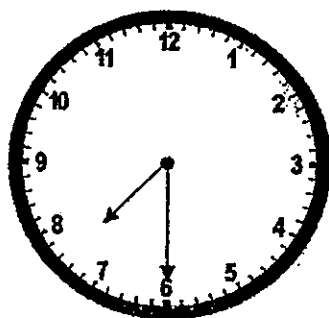
Each card can only be used once.

5

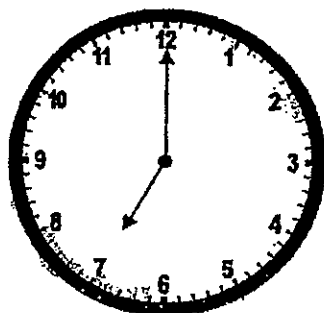
9

4

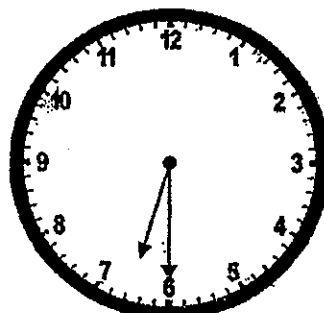
12) Match the clock to the correct time.



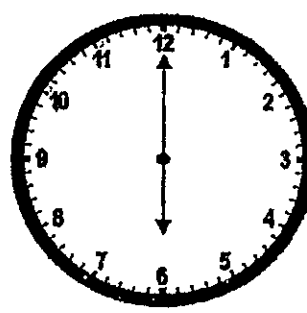
•



•



•



•

•

•

•

•

7 o'clock

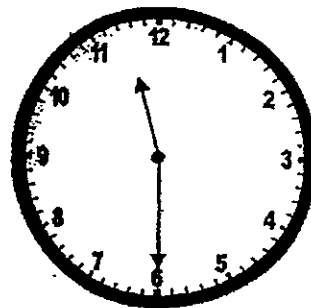
half past 6

half past 7

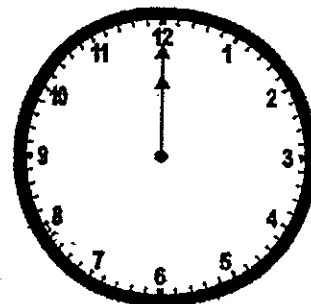
6 o'clock

Look at the pictures and write the correct times using 'half past' or 'o'clock' for Questions 13 and 14.

13) Jane has her lunch at





14) She leaves for school at




15) Dennis has his lunch at half past 1 in the afternoon every day.

Which one of the following clocks shows the correct time?

Tick the correct box.


☐☐☐☐

- 16) Livia paid for a new bag using the money shown below.




The cost of the new bag is \$

- 17) Tick (✓) the number of 20-cent coins in Box B that is needed to exchange with the same amount of money shown in Box A.

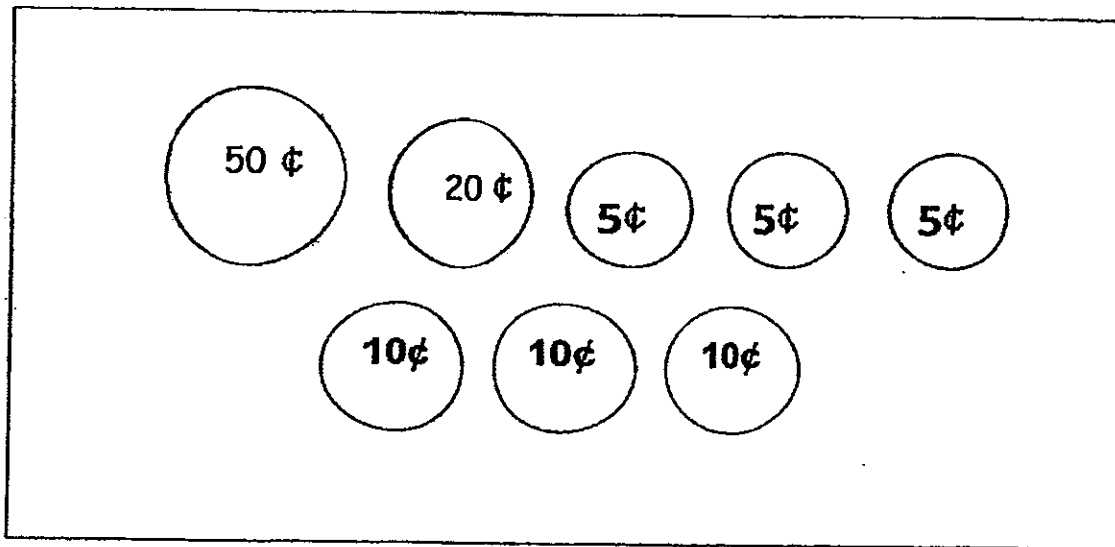


Box A

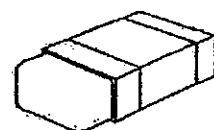
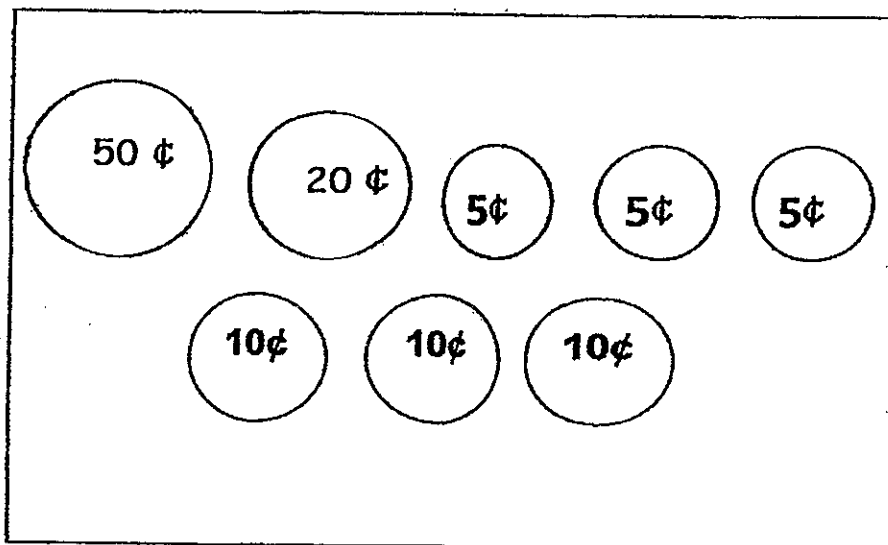


Box B

- 18) Peter has 20 cents. His father gives him 55 cents.
Colour the **exact** amount of money that Peter has altogether.



- 19) Kelvin wants to buy an eraser that costs 90 cents.
He uses 5 coins.
Shade the **5** coins that Kelvin uses to buy the eraser.



Eraser 90¢

- 20) Mrs Raja bought the bag shown below.
She gave the cashier some money and received \$27 change.
How much did she give the cashier?



Bag \$23

She gave the cashier \$

Section B (5 questions x 2 marks)

Solve each of the following problem sums.

Show all the workings and statements clearly.

- 21) There are 11 boys in the music studio.

Working

There are 8 more girls than boys in the studio.

How many girls are there in the studio?

$$\square \bigcirc \square = \square$$

There are _____ girls in the studio.

22) Some pupils were playing in the field at first.

Later, 8 pupils came to join them .

At the end, there were 17 pupils in the field altogether.

How many pupils were there in the field at first?

$$\square \bigcirc \square = \square$$

There were _____ pupils in the field at first.

23) Tim had some marbles.

He gave 8 marbles to Joe and 7 marbles to Ahmad.

How many marbles did Tim give away in all?

$$\square \bigcirc \square = \square$$

Tim gave away _____ marbles in all.

24) Darren had \$20.

He had \$2 left after paying for the pizza.

How much did the pizza cost?

$$\begin{array}{c} \$ \square \bigcirc \$ \square = \$ \square \end{array}$$

The pizza cost \$_____

25) Janet has \$ 50. She wants to buy two items.

Which two items can she buy with exactly \$50?



Blouse	Books	Teddy Bear	Birthday Present
\$26	\$16	\$24	\$35

$$\begin{array}{c} \$ \square \bigcirc \$ \square = \$ \square \end{array}$$

She can buy _____ and _____

End of the Paper

Answer Ke

EXAM PAPER 2013

SCHOOL : PEI HWA PRESBYTERIAN PRIMARY SCHOOL

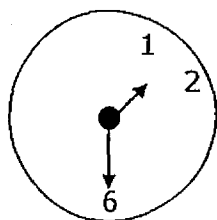
SUBJECT : PRIMARY 1 MATHEMMATICS

TERM : SA 2 - REVIEW TEST (2013)

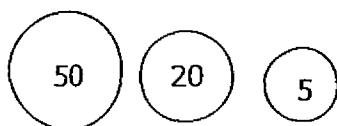
1. 45, forty-five
2. 70
3. 81 ones
4. 33
5. 40
6. 38, 35
7. 56, 65, 78, 87
8. 5 tens 8 ones = 58
9. 97
10. 44
11. 95

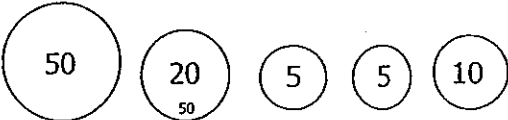


13. Half past 11
14. 12 o'clock
- 15.



16. 18
17. 10
- 18.



19. 

20. $\$27 + \$23 = \$50$

21. $11 + 8 = 19$

22. $17 - 8 = 9$

23. $8 + 7 = 15$

24. $20 - 2 = 18$

25. $26 + 24 = 50$

Blouse, teddy bear